



Maak de sommen

$12 = 10 + 2$

$14 = 10 +$

$18 = 10 +$

$16 = 10 +$

$1 + 2 =$

$11 + 2 =$

$3 + 2 =$

$13 + 2 =$

$21 = 20 +$

$26 = 20 +$

$23 = 20 +$

$28 = 20 +$

$3 + 3 =$

$13 + 3 =$

$5 + 2 =$

$5 + 12 =$



Hoeveel geld?

a




b



c




d





Maak af



Bas en kim verdelen eerlijk.
 Hoeveel krijgt ieder?
 Omcirkel het geld.

a



b



c

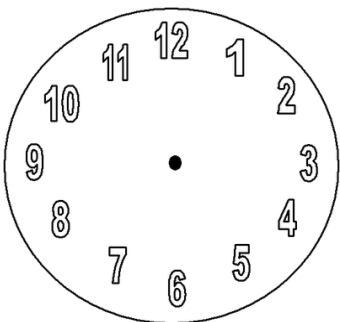


d

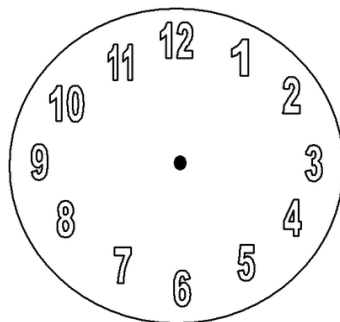


Teken de wijzers

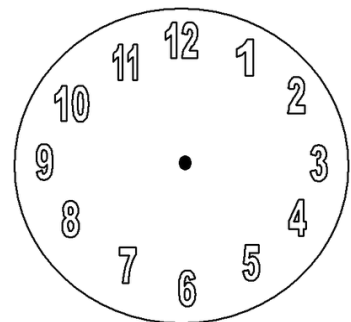
a





6 uur



half 4



9 uur





prins



prinses



koningin



kroon



koets













Woordzoeker

k o n i n g i n f
e r d w b i v a e
j a r i g a l i e
s n m a k o e t s
s j p o r z l l t
h e t r o o n m p
g c j e o z e t r
o p r i n s e s i
u o v l a g h t n
d o k p a l e i s

koningin
feest
koets
kroon
prinses
troon

oranje
paleis
jarig
vlag
prins
goud



