


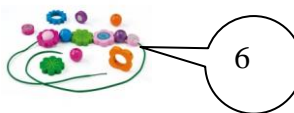

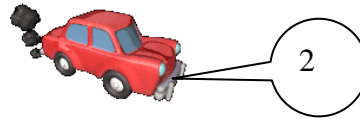
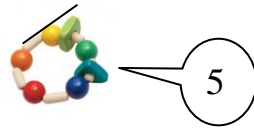


Naam:

Groep:

Naar de speelgoedwinkel

Brechje heeft 10 euro. Hoeveel krijgt ze terug?



$\begin{array}{c} \boxed{13} \\ \diagdown \quad \diagup \\ \boxed{10} \quad \boxed{3} \end{array}$	$\begin{array}{c} \boxed{18} \\ \diagdown \quad \diagup \\ \boxed{10} \quad \boxed{} \end{array}$	$\begin{array}{c} \boxed{17} \\ \diagdown \quad \diagup \\ \boxed{10} \quad \boxed{} \end{array}$	$\begin{array}{c} \boxed{16} \\ \diagdown \quad \diagup \\ \boxed{10} \quad \boxed{} \end{array}$	$\begin{array}{c} \boxed{12} \\ \diagdown \quad \diagup \\ \boxed{10} \quad \boxed{} \end{array}$
$\begin{array}{c} \boxed{19} \\ \diagdown \quad \diagup \\ \boxed{10} \quad \boxed{} \end{array}$	$\begin{array}{c} \boxed{20} \\ \diagdown \quad \diagup \\ \boxed{10} \quad \boxed{} \end{array}$	$\begin{array}{c} \boxed{15} \\ \diagdown \quad \diagup \\ \boxed{10} \quad \boxed{} \end{array}$	$\begin{array}{c} \boxed{11} \\ \diagdown \quad \diagup \\ \boxed{10} \quad \boxed{} \end{array}$	$\begin{array}{c} \boxed{14} \\ \diagdown \quad \diagup \\ \boxed{10} \quad \boxed{} \end{array}$