

Naam :

Nr. :



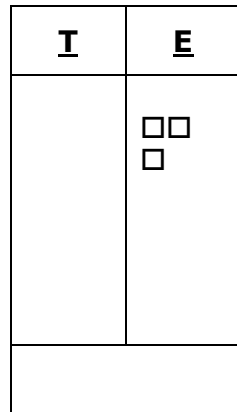
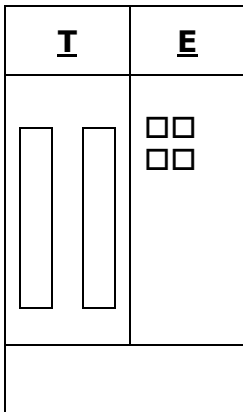
Datum :

Getallen tot 30 herhalen

(ZGZG 3A: lessen 3 en 4)

1. Welk getal wordt hier voorgesteld?

2. Teken de tientallen (staafjes) en de eenheden (blokjes)





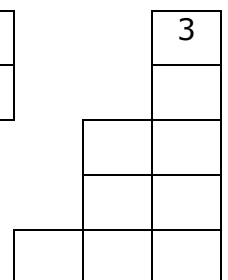

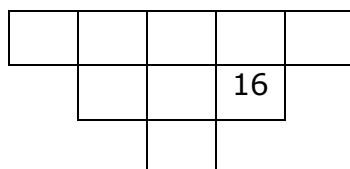
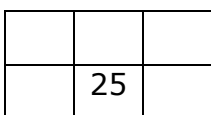
3. Rangschik de getallen van klein naar groot of van groot naar klein.

23, 17, 30, 6, 12
..... < < < <.....

4, 18, 12, 21, 6
..... > > > >

14, 11, 13, 4, 9
..... > > > >

4. Je ziet telkens een stukje uit het 100-veld geknipt. Vul de lege vakjes in.



5. Vul de getallen aan op de getallenas.

12 - 16 - 20 - 28 - 8

