
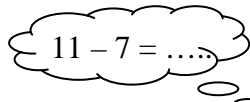


Blok 1 – les 7

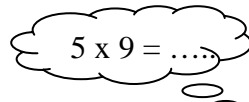
1. Weet je nog?



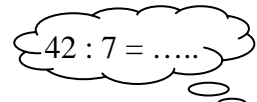
$900 + 500 = \dots$



$1100 - 700 = \dots$



$5 \times 900 = \dots$



$4200 : 7 = \dots$

+	-	x	:
---	---	---	---

$600 + 500 = \dots$

$80 + 60 = \dots$

$7\ 000 + 4\ 000 = \dots$

+	-	x	:
---	---	---	---

$1\ 500 - 700 = \dots$

$170 - 90 = \dots$

$13\ 000 - 6\ 000 = \dots$

+	-	x	:
---	---	---	---

$8 \times 300 = \dots$

$3 \times 40\ 000 = \dots$

$5 \times 6\ 000 = \dots$

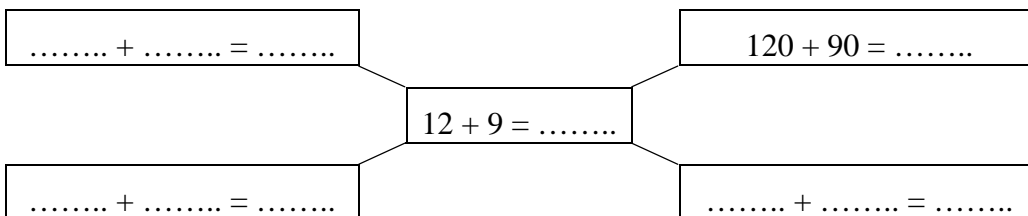
+	-	x	:
---	---	---	---

$2\ 400 : 6 = \dots$

$360 : 9 = \dots$

$140\ 000 : 7 = \dots$

2. Bedenk sommen die bij de hulpsom passen



3a. Reken uit

+	-	x	:
---	---	---	---

$900 + 800 = \dots$

$900 + 809 = \dots$

$908 + 809 = \dots$

$949 + 849 = \dots$

+	-	x	:
---	---	---	---

$800 - 600 = \dots$

$809 - 600 = \dots$

$809 - 607 = \dots$

$835 - 607 = \dots$

Blok 1 – les 7 vervolg**3b. Reken uit**

+	-	x	:
---	---	---	---

$7 \times 600 = \dots\dots$

$7 \times 602 = \dots\dots$

$7 \times 610 = \dots\dots$

$7 \times 612 = \dots\dots$

+	-	x	:
---	---	---	---

$4800 : 6 = \dots\dots$

$4806 : 6 = \dots\dots$

$4830 : 6 = \dots\dots$

$4836 : 6 = \dots\dots$

4. Reken uit

+	-	x	:
---	---	---	---

$52 : 7 = \dots \text{ r. } \dots$

$59 : 10 = \dots \text{ r. } \dots$

$50 : 6 = \dots \text{ r. } \dots$

$57 : 9 = \dots \text{ r. } \dots$

+	-	x	:
---	---	---	---

$43 : 5 = \dots \text{ r. } \dots$

$43 : 6 = \dots \text{ r. } \dots$

$43 : 7 = \dots \text{ r. } \dots$

$43 : 8 = \dots \text{ r. } \dots$

5. Reken uit

+	-	x	:
---	---	---	---

$12 \times 16 = \dots\dots$

$11 \times 13 = \dots\dots$

$13 \times 15 = \dots\dots$

$15 \times 15 = \dots\dots$

+	-	x	:
---	---	---	---

$12 \times 27 = \dots\dots$

$11 \times 35 = \dots\dots$

$13 \times 28 = \dots\dots$

$14 \times 31 = \dots\dots$