

Let op! Om sommige antwoorden moet je 2 verschillende kringen zetten.

1 Bij welke tafel horen de getallen?

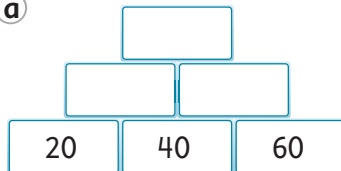
Zet een rode kring om antwoorden uit de tafel van 3, 4 en 5.

Zet een blauwe kring om antwoorden uit de tafel van 6, 7 en 8.

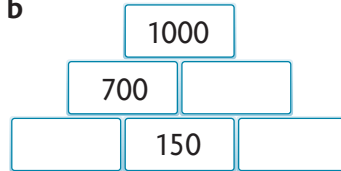
82	20	34	12	29	57	72	5	56	13	16	67
11	17	4	41	31	49	45	33	7	63	61	1
26	35	23	15	64	9	2	19	30	47	42	22

2 Vul in.

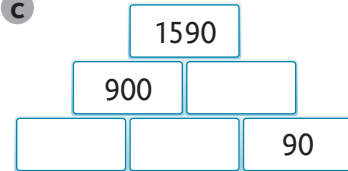
a



b

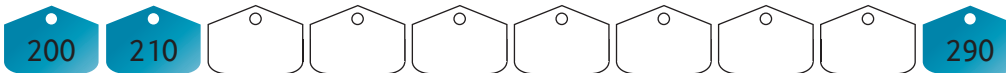


c

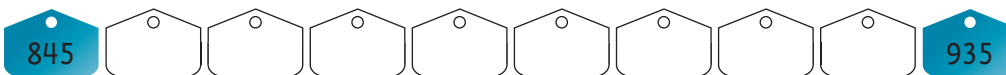


3 Tel verder met sprongen van 10.

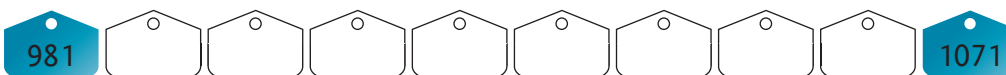
a



b

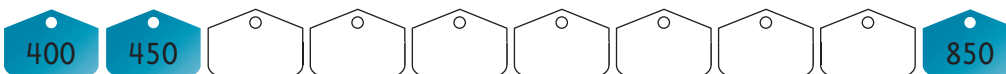


c

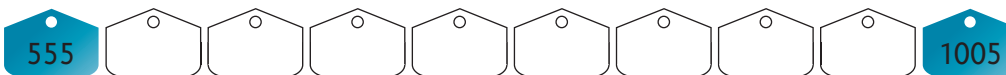


4 Tel verder met sprongen van 50.

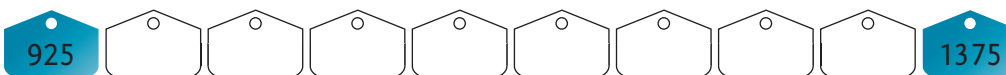
a



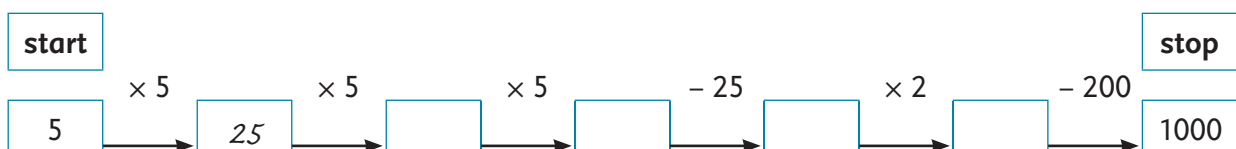
b



c




5 Reken uit.




1 Verdelen in gelijke stukken.


a Verdeel in 2 stukken.




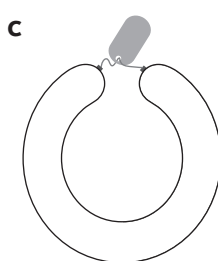
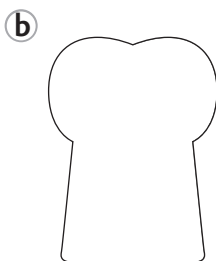
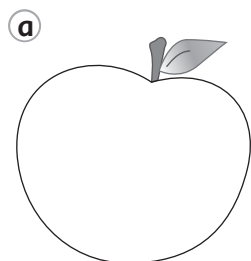
b Verdeel in 4 stukken.



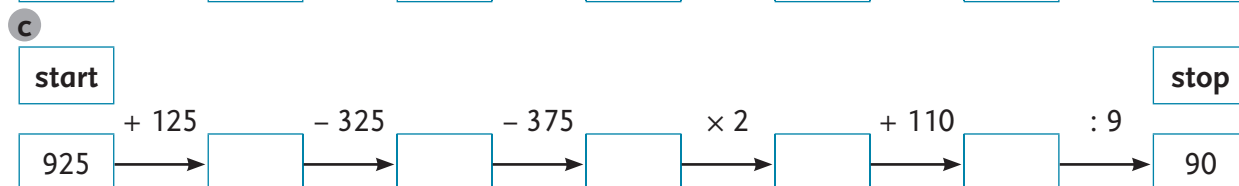
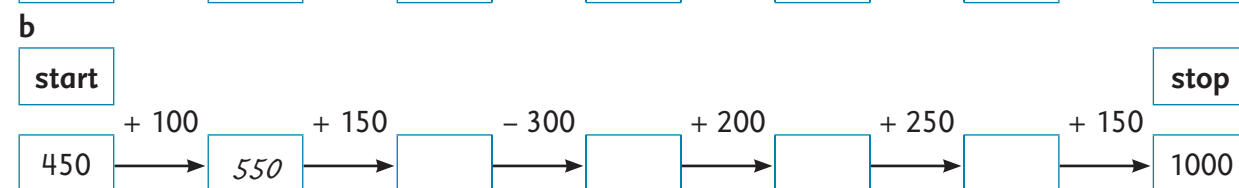
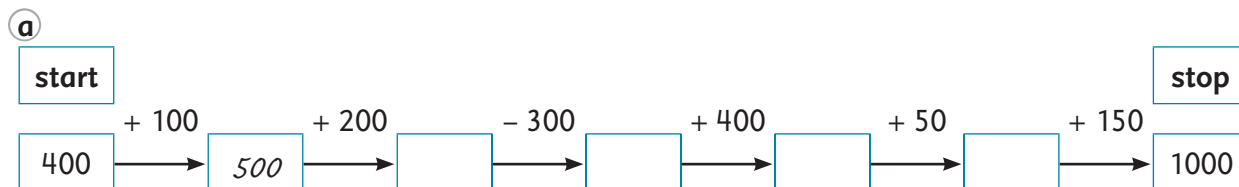
c Verdeel in 8 stukken.



2 Kleur de helft.

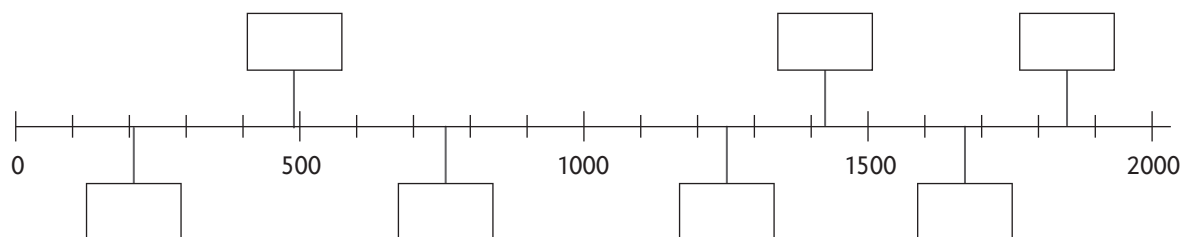


3 Reken uit.



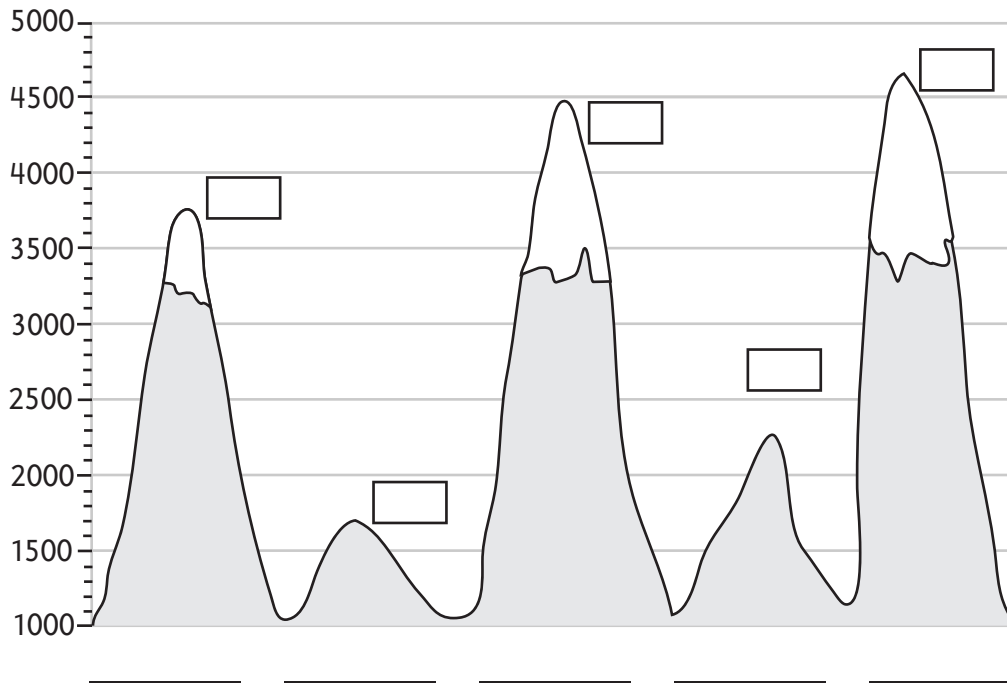
4 Vul de goede getallen in.

Kies uit: 490, 1250, 210, 760, 1850, 1425, 1675.










1 Welke berg is het hoogst?

- a Zet de namen van de bergen op de juiste plek. Je hoeft alleen de beginletters op te schrijven. Rothorn 2276 m, Groshorn 3762 m, Monte Rosa 4634 m, Mont Tendre 1680 m, Matterhorn 4478 m.
- b Geef de bergen een nummer in volgorde van laag naar hoog.
- c Als je ongeveer 10 km wilt klimmen, welke bergen ga jij dan op?

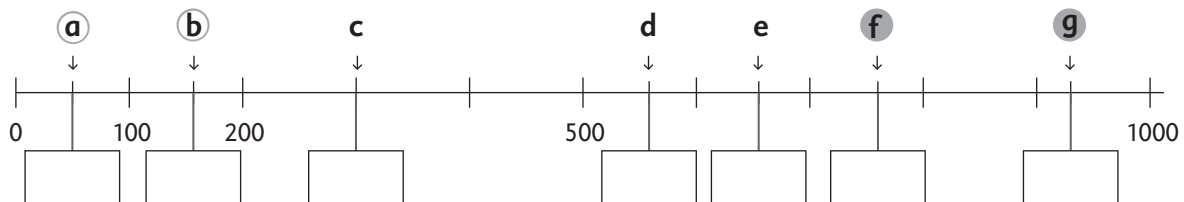


2 Betaal gepast.

								
a	€ 1250							
b	€ 1508							
c	€ 1111							
d	€ 1777							
e	€ 1438							
f	€ 1414							

3 Welke getallen horen erbij?


Kies uit: 300, 50, 165, 765, 560, 930, 655.




1 Teken de sprongen.

Schrijf bij elke sprong hoe groot hij is.


- a Spring naar 1750.



- b Spring naar 2371.



- c Spring naar 3369.

**2** Welke som hoort erbij?

a

D	H	T	E
1	8	6	0

b

D	H	T	E
2	7	6	0

c

D	H	T	E
2	9	1	9

d

D	H	T	E
3	5	6	6

3 Reken uit.

a	b	c	d
$64 : 2 =$ _____	$180 : 6 =$ _____	$480 : 8 =$ _____	$440 : 4 =$ _____
$300 : 3 =$ _____	$360 : 6 =$ _____	$560 : 8 =$ _____	$444 : 4 =$ _____
$180 : 3 =$ _____	$49 : 7 =$ _____	$540 : 9 =$ _____	$125 : 5 =$ _____
$24 : 4 =$ _____	$490 : 7 =$ _____	$630 : 9 =$ _____	$625 : 5 =$ _____